

# Final Revision Sheet | Lower Secondary

## Stage (6-8)

1<sup>st</sup> Semester | 2023-2024

**Subject:** Science

**Chapter:** 1, 2, 3.

**Objectives:**

- To review the material covered in unit 1,2 and 3.

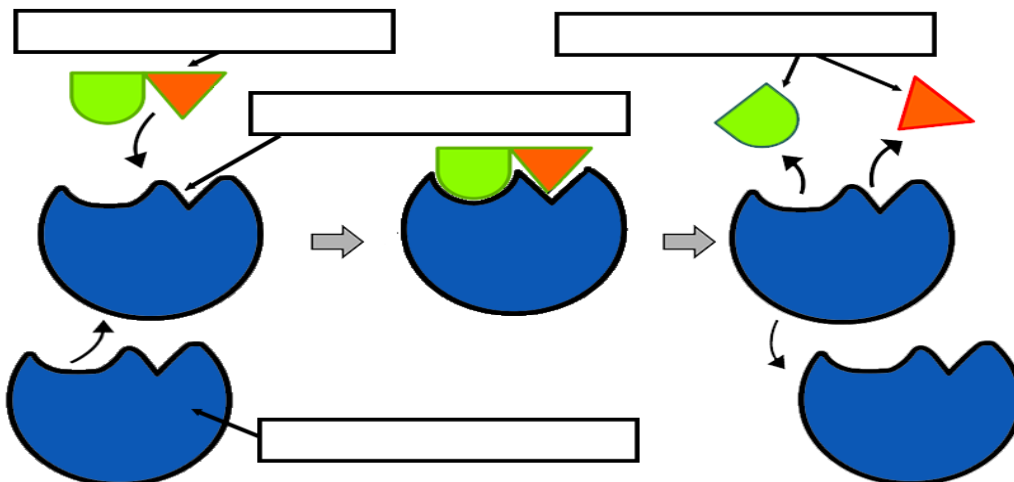
### Question One:

Complete the following table regarding red blood cells and white blood cells.

Cell		
Nucleus		
Shape		
Hemoglobin		
Function		

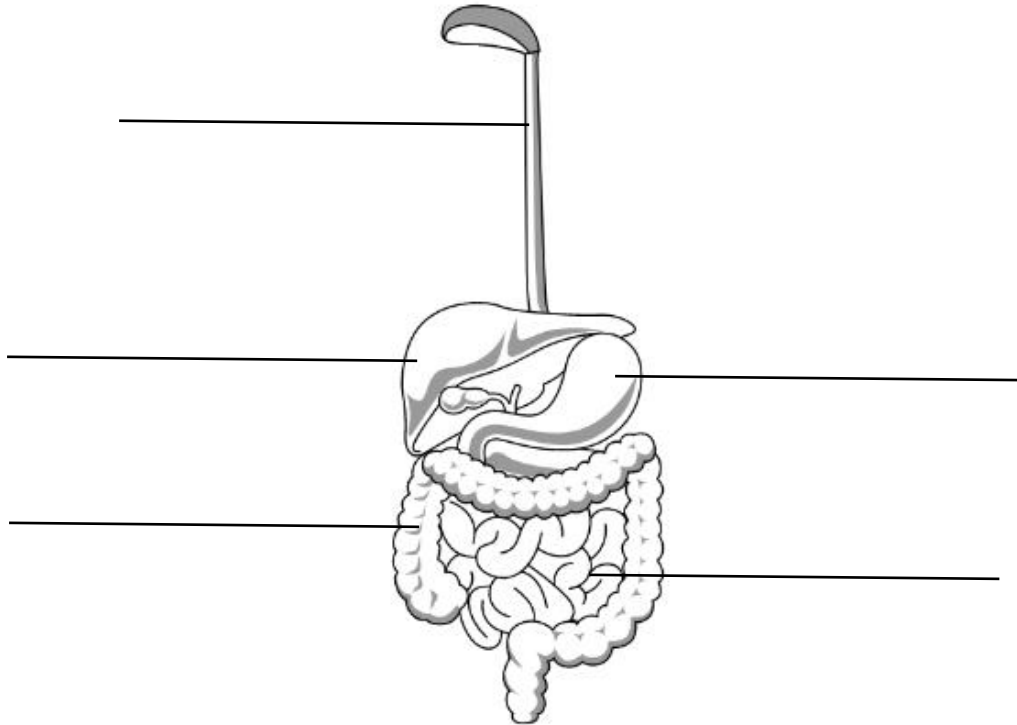
### Question Two:

Label the following diagram regarding digestive enzymes.



**Question Three:**

1- Label the following digestive system.

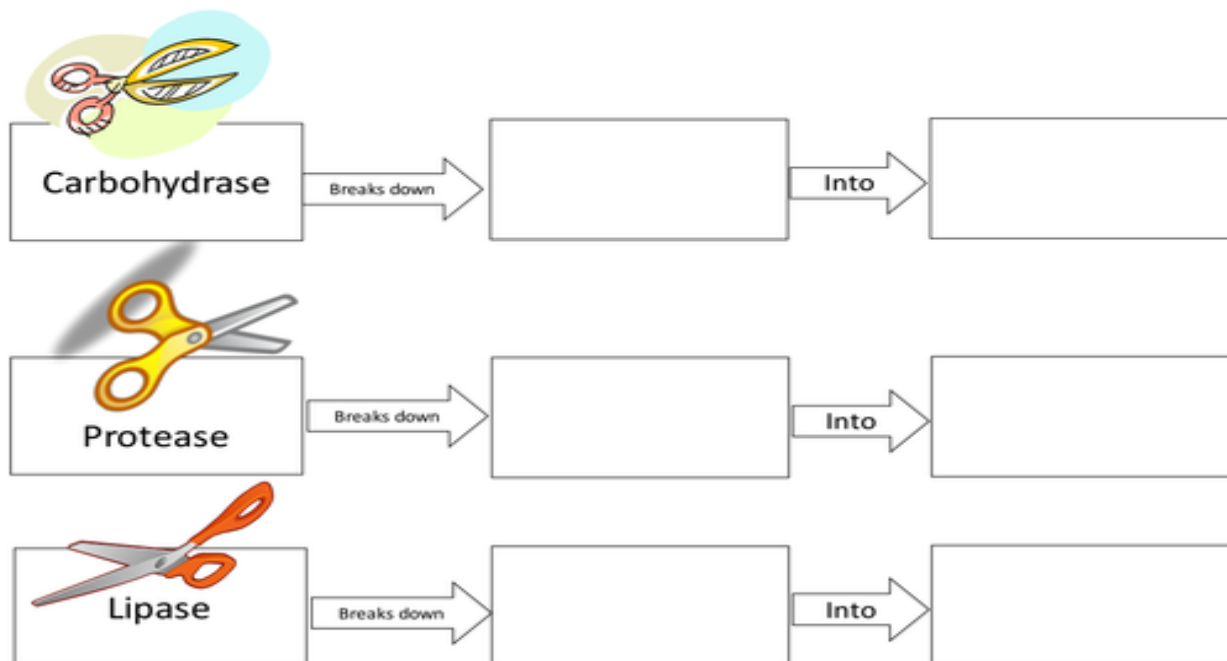


2- Complete the following table with the function of each organ.

Organ	Function
Stomach	
Small intestine	
Large intestine	

**Question Four:**

Complete the following diagram regarding digestive enzymes.



**Question Five:**

There are different tests which can be used to detect carbohydrates, proteins and lipids.

Complete the following table with the correct reagent used and the observation.

<b>Substance</b>	<b>Reagent</b>	<b>Observation</b>
Carbohydrates		
Proteins		
Fats		