

The Primary Stage of Grades 1-3  
 Math Worksheet # 3

Name: \_\_\_\_\_

Grade Two

Date: \_\_\_\_\_

Section: \_\_\_\_\_

Q1: Order the following numbers from the least to the greatest.

1) 216 532 162 308 478

<input type="text"/>	<input type="text"/>	<input type="text"/>	<input type="text"/>	<input type="text"/>	<input type="text"/>
----------------------	----------------------	----------------------	----------------------	----------------------	----------------------

2) 723 415 328 103 689

<input type="text"/>	<input type="text"/>	<input type="text"/>	<input type="text"/>	<input type="text"/>	<input type="text"/>
----------------------	----------------------	----------------------	----------------------	----------------------	----------------------

3) 474 447 620 552 125

<input type="text"/>	<input type="text"/>	<input type="text"/>	<input type="text"/>	<input type="text"/>	<input type="text"/>
----------------------	----------------------	----------------------	----------------------	----------------------	----------------------

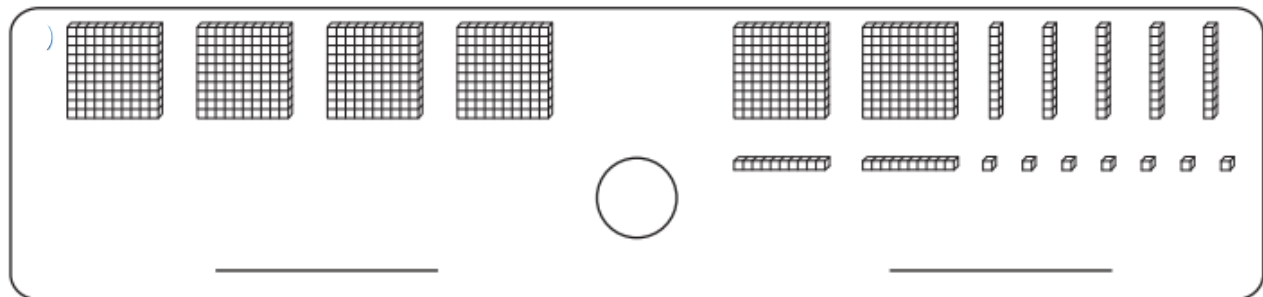
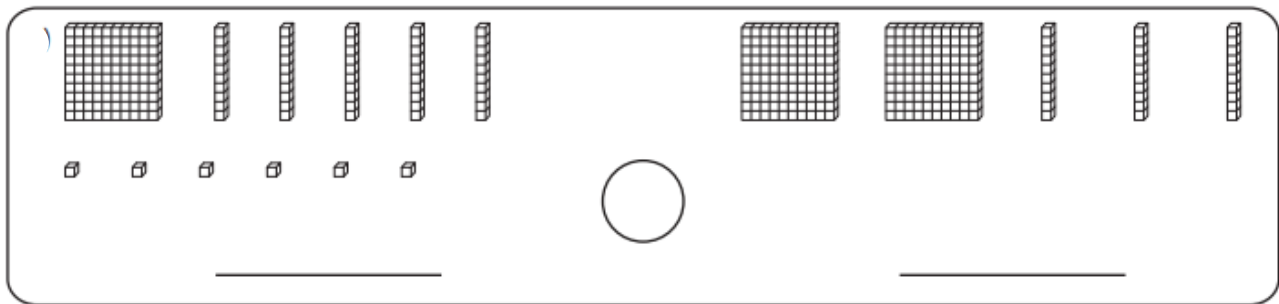
4) 815 964 528 582 631

<input type="text"/>	<input type="text"/>	<input type="text"/>	<input type="text"/>	<input type="text"/>	<input type="text"/>
----------------------	----------------------	----------------------	----------------------	----------------------	----------------------

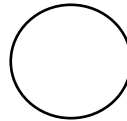
5) 109 441 414 326 236

<input type="text"/>	<input type="text"/>	<input type="text"/>	<input type="text"/>	<input type="text"/>	<input type="text"/>
----------------------	----------------------	----------------------	----------------------	----------------------	----------------------

Q2: Which number is greater? Use  $>$ ,  $<$  or  $=$  signs



3 hundreds  
5 tens  
7 ones



3 hundreds  
7 ones  
5 tens

Q3: Read and answer the questions below explaining your answer.

a. Salma read 157 pages, and Zaina read 175 pages. Who read more?

\_\_\_\_\_

b. Zaid scored 540 points in a video game, and Yousef scored 499 points. Who scored less?

\_\_\_\_\_