

**The Primary Stage of Grades (4-5)
School Year 2022 - 2023**

Name: _____

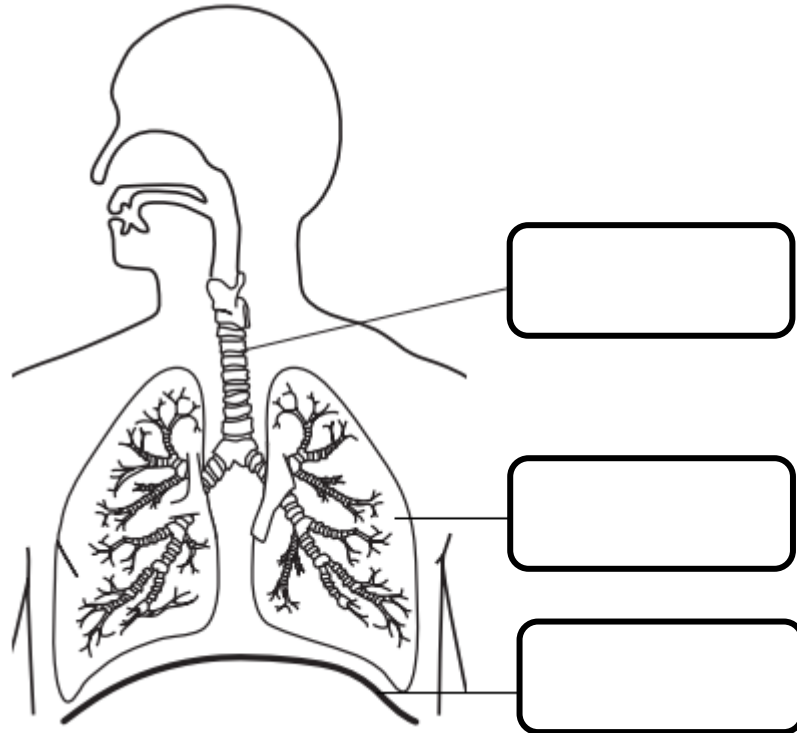
Subject: Science Final Revision sheet

Date: / /

Class: Grade Five National (A/B)

Question One:

a- Label the below diagram with the correct name of each organ:



b- What name is given to this human body system?

.....

Accredited by



Cambridge Assessment
International Education
Cambridge International School

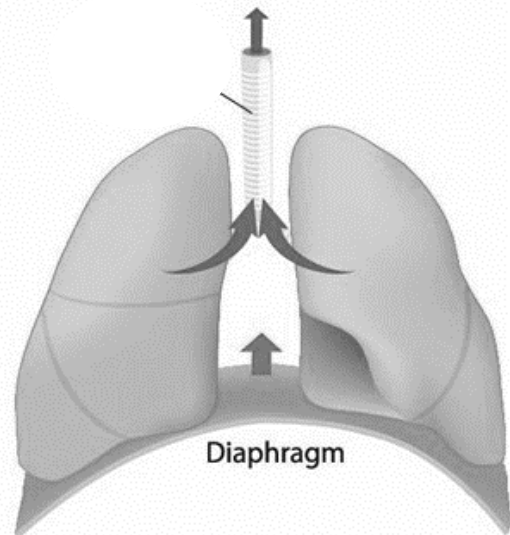
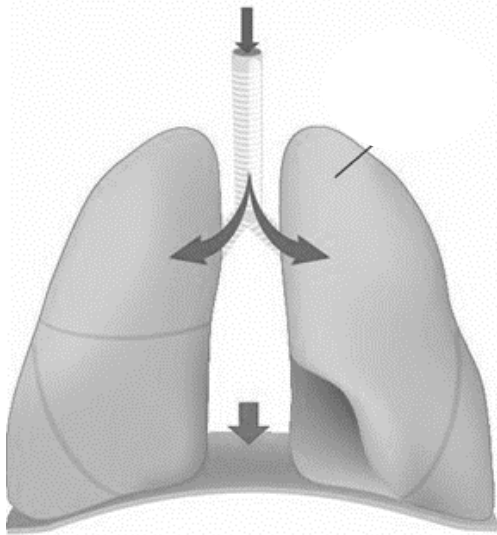
edexcel

CIS
COUNCIL OF
INTERNATIONAL
SCHOOLS



مُعْتَمَدَةٌ مِنْ

c- Look at the following diagrams and determine whether it shows inhalation or exhalation:



d- Describe how the **diaphragm** works.

.....

.....

.....

Question Two:

Match the organ with its function:

The nose

The tube that is lined with fine hair covered with mucus to filter the air.

Trachea

They provide the blood with oxygen and take out carbon dioxide.

Lungs

It warms, moistens and filters the air.

Question Three:

A- List the **organs** that **the circulatory system** consists of:

.....

B- Answer the following questions regarding **blood components**.

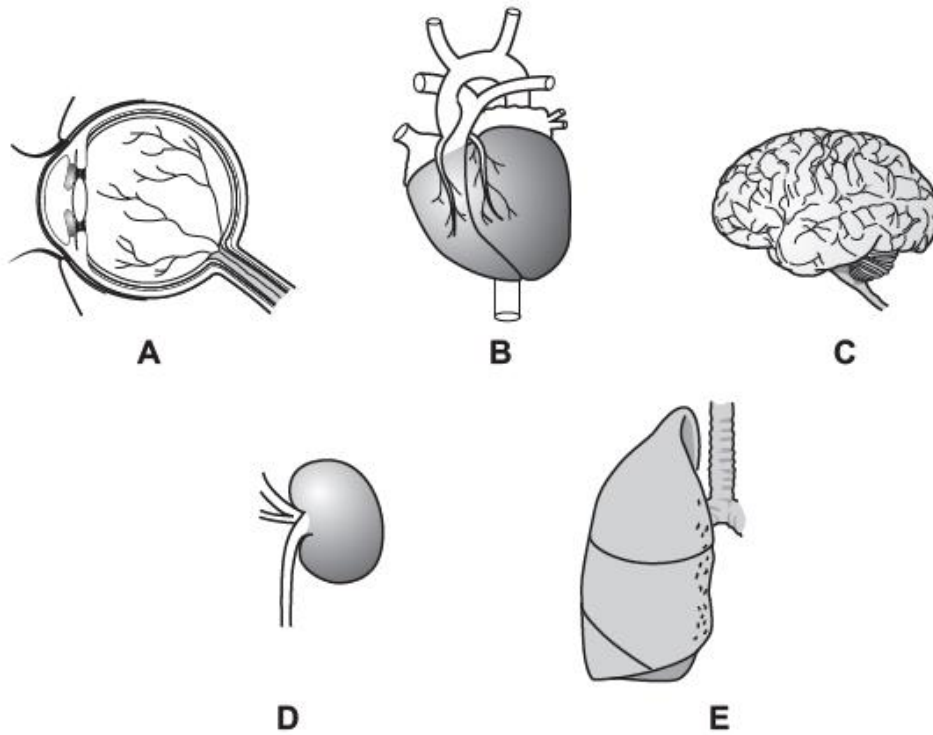
I transport oxygen. Who am I?

I Fight diseases. Who am I?

I am responsible for blood clotting. Who am I?

I am the liquid part of the blood. Who am I?

Question Four:



Complete the sentences.

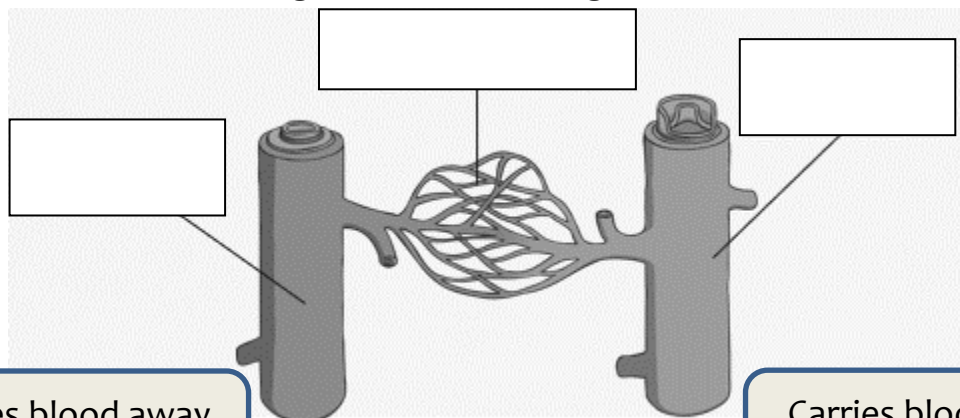
Choose from

A B C D E

a- The organ that pumps blood around the body is

b- The organ that puts oxygen into the blood is

c- Label the following blood vessels diagram.



Carries blood away from the heart.

Carries blood back to the heart.

Question Five:

Follow the path the blood take as it leaves the lungs, color blood full with oxygen with red, and blood that is poor with oxygen with blue.

