



The National Orthodox School/ Shmaisani

Name: _____

Subject: science
Worksheet (4): Net Forces

Date: / /

Class: Grade: 6

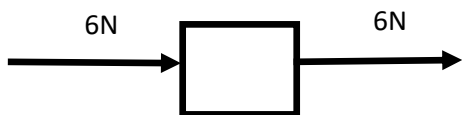
Objective:

- Calculate the net force acting on an object.
- Understand the difference between balanced and unbalanced forces.

Find the net force in each of the following situations, and decide if the forces are balanced or unbalanced.



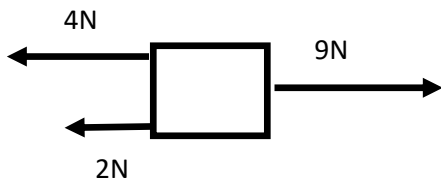
Net force: _____ .



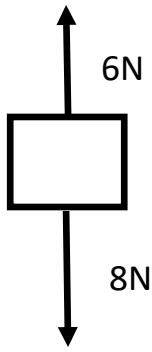
Net force: _____ .



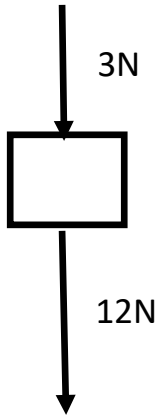
Net force: _____ .



Net force: _____ .

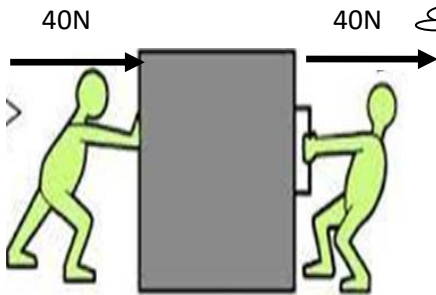


Net force: _____.

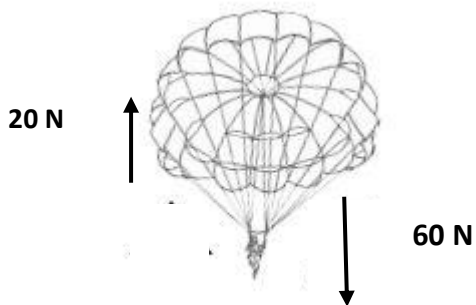


Net force: _____.

Please correct the direction of the arrow on the printed worksheet.



Net force: _____.



Net force: _____.