

The Primary Stage of Grades (4-5)
School Year 2022 - 2023

Name: _____

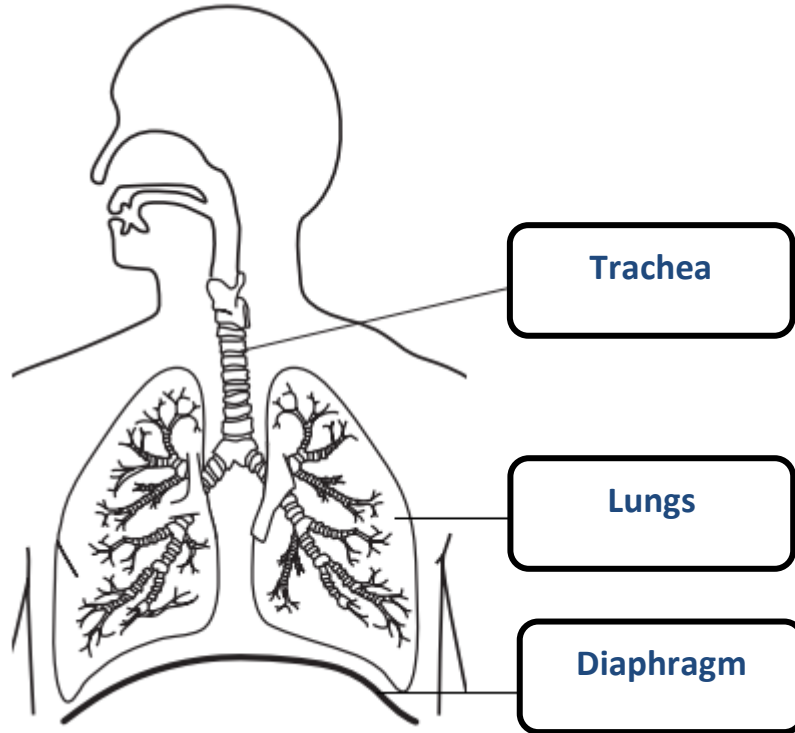
Subject: Science Final Revision sheet

Date: / /

Class: Grade Five National (A/B)

Question One:

a- Label the below diagram with the correct name of each organ:



b- What name is given to this human body system?

The respiratory system.

Accredited by



Cambridge Assessment
International Education
Cambridge International School

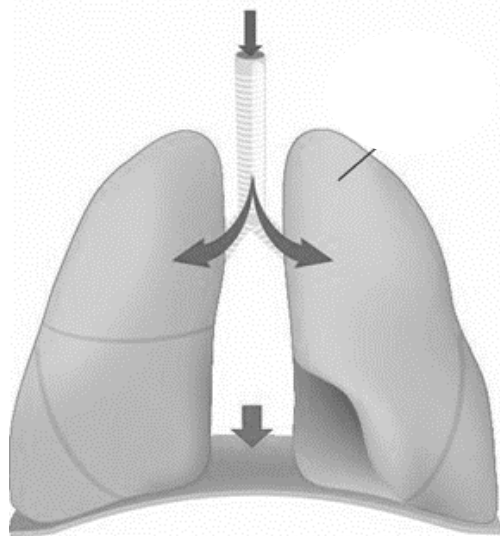
edexcel

CIS
COUNCIL OF
INTERNATIONAL
SCHOOLS

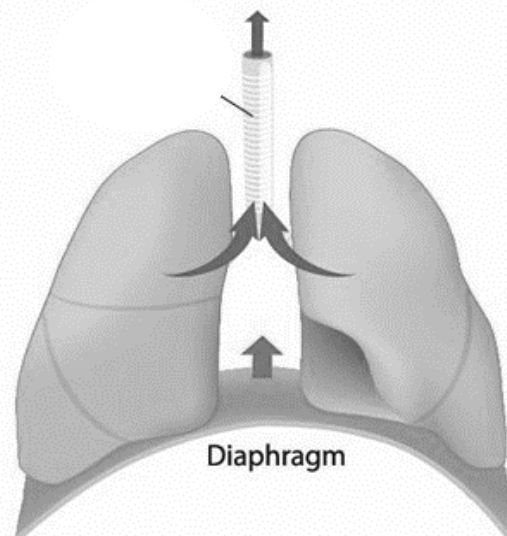


مُعتمدة من

c- Look at the following diagrams and determine whether it shows inhalation or exhalation:



Inhalation



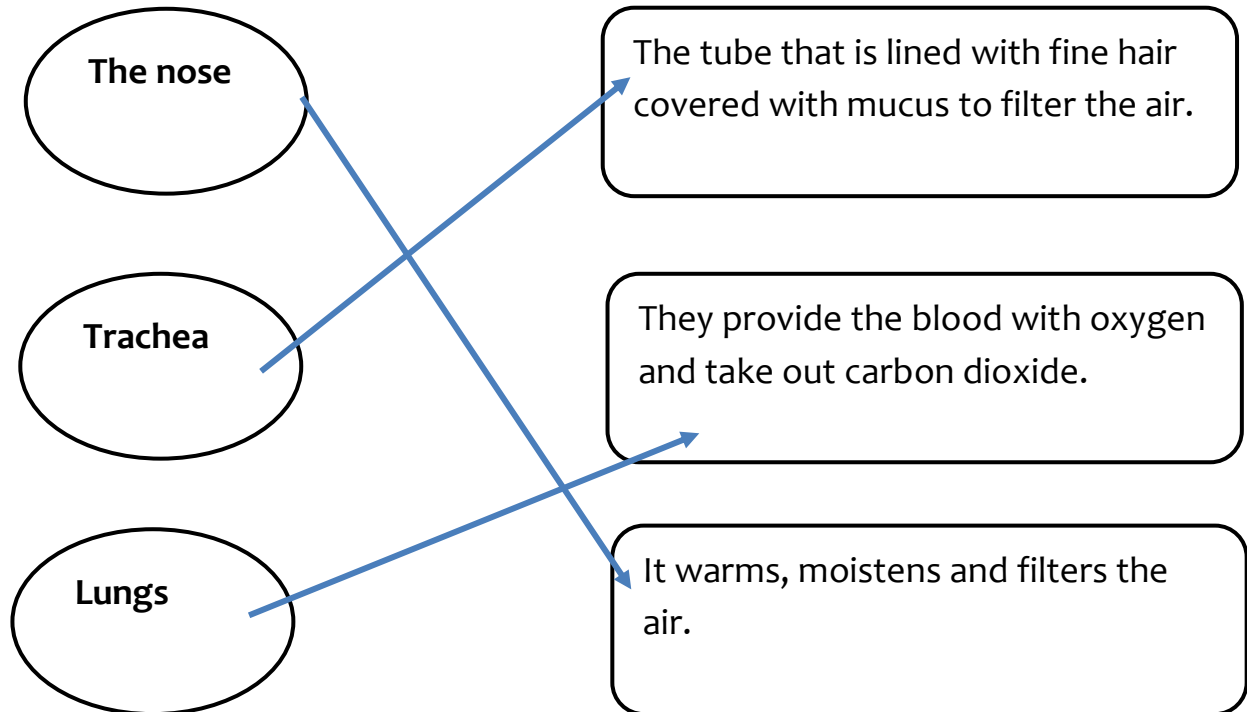
Exhalation

d- Describe how the **diaphragm** works.

Is a muscle that contracts and relaxes. As it contracts it becomes flat so the lungs expand to allow air to get in (inhaling). Then it relaxes and gets curved to push air out (exhaling)

Question Two:

Match the organ with its function:



Question Three:

A- List the **organs** that **the circulatory system** consists of:

The heart, The blood and the blood vessels.

B- Answer the following questions regarding **blood components**.

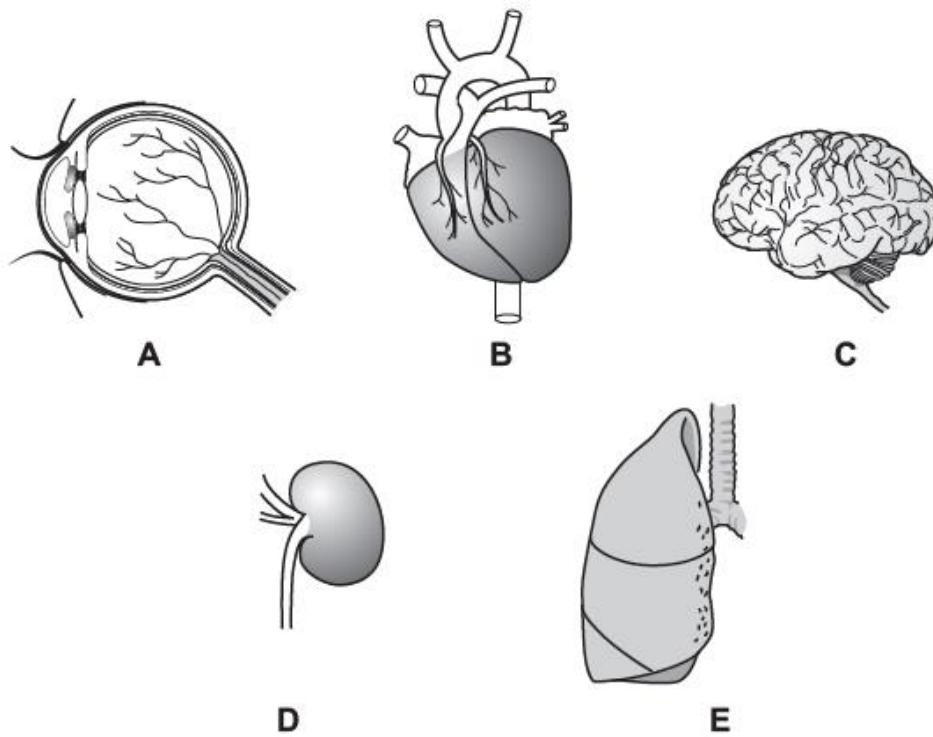
I transport oxygen. Who am I? **Red blood cells.**

I Fight diseases. Who am I? **White blood cells.**

I am responsible for blood clotting. Who am I? **Platelets.**

I am the liquid part of the blood. Who am I? **Plasma.**

Question Four:



Complete the sentences.

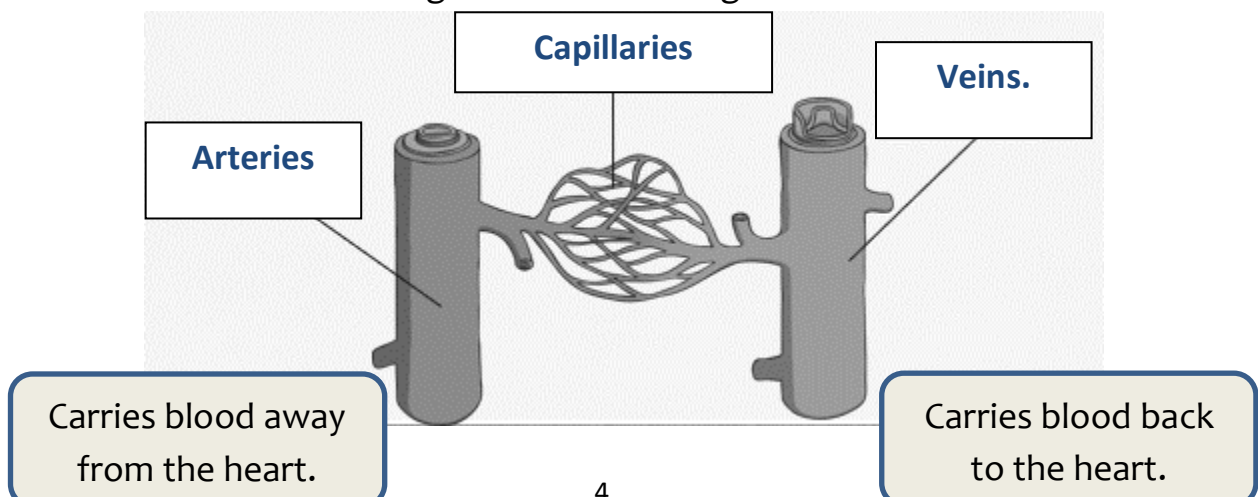
Choose from

A **B** **C** **D** **E**

a- The organ that pumps blood around the body is **B**

b- The organ that puts oxygen into the blood is **E**

c- Label the following blood vessels diagram.



Question Five:

Follow the path the blood take as it leaves the lungs, color blood full with oxygen with red, and blood that is poor with oxygen with blue.

