



The National
Orthodox School
Shmaisani

Name:

Worksheet(4) volume of pyramids and cones

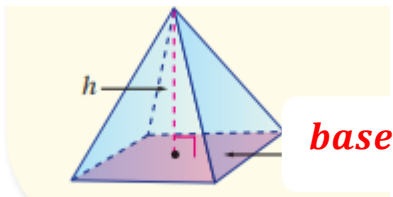
Grade:8(A, B)

Subject : Math (Unit (7):Mensuration of planes and solids)

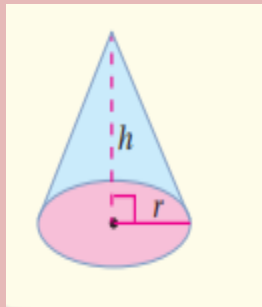
Date :

Objective: Find the volume of pyramids and cones

volume of the pyramid = $\frac{1}{3}$ area of the **base** \times height(h)



volume of the cone = $\frac{1}{3}$ area of the base \times height(h)



$$V = \frac{1}{3} \pi r^2 h$$

Accredited by



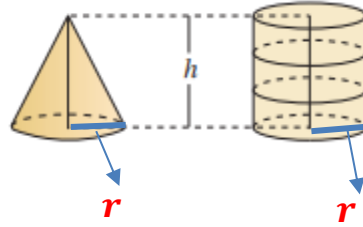

Cambridge Assessment
International Education
Cambridge International School

edexcel

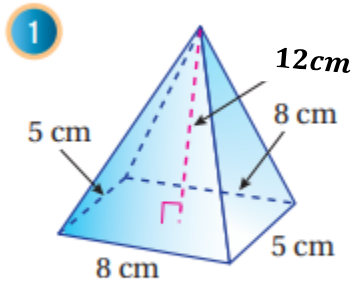
CIS
COUNCIL OF
INTERNATIONAL
SCHOOLS



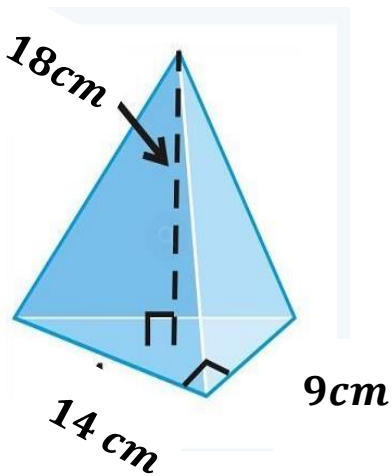
معتمدة من



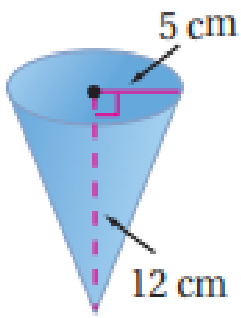
Exercise (1): Find the volume of the following solids:



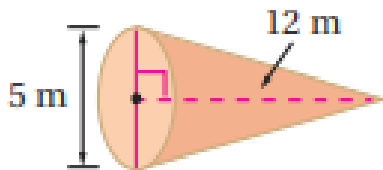
2



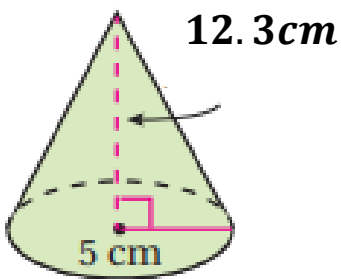
3



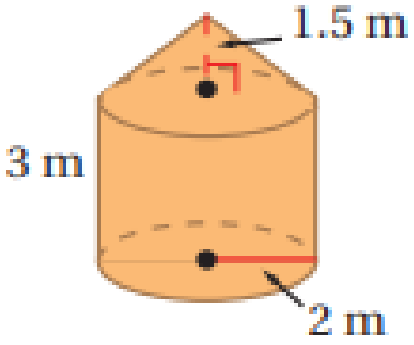
4



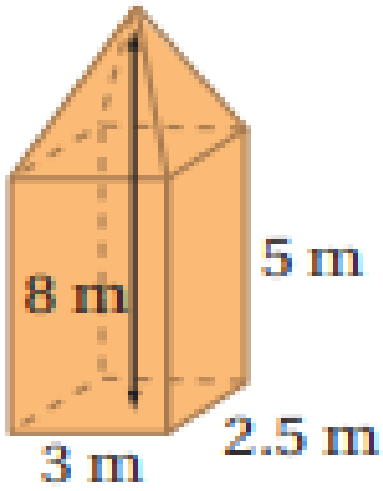
5



6



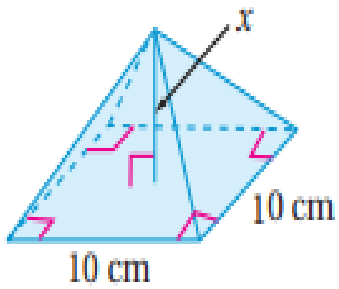
7



Exercise (2): Find the missing dimension in each of the following solids:

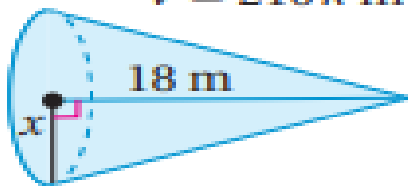
1

$$V = 200 \text{ cm}^3$$



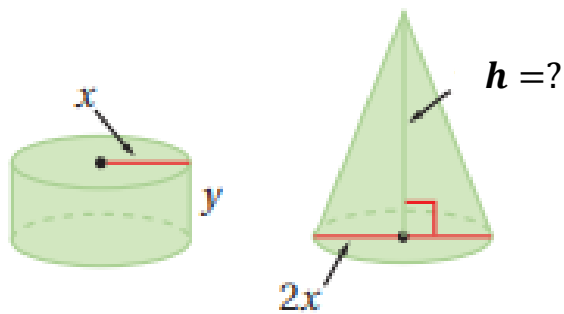
2

$$V = 216\pi \text{ m}^3$$

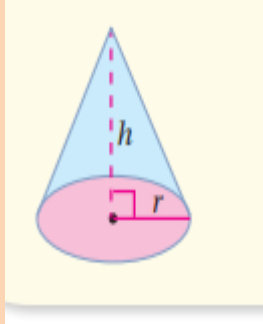


Exercise (3): The cone and the cylinder shown below have the same volume, find the height of the cone (h)

if the height of the cylinder (y) = $2\frac{3}{4}$ cm?



Exercise (4): *The area of the base of the cone shown below is $(314)\text{cm}^2$ and a height (9cm) , find : a) its volume. b) its radius.*



Exercise(5): *Find the height of a pyramid of volume 20m^3 and base area 12m^2 ?*

Teacher: Wisam Al-mashni