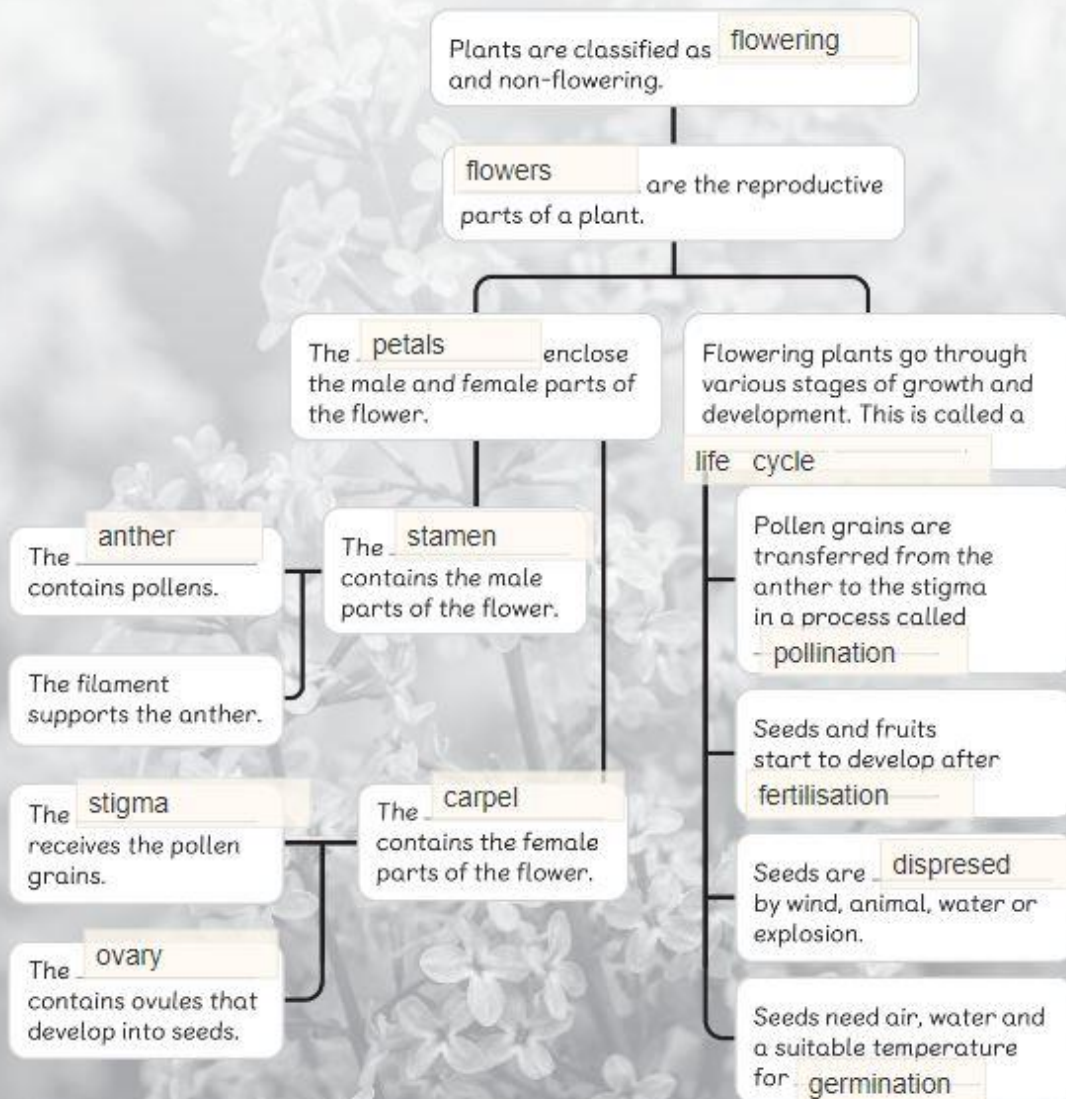


Let's Map It!

Fill in the blanks. Use the following words.

anther carpel dispersed fertilisation flowering
flowers germination life cycle ovary
petals pollination stamen stigma



Let's Review

1 Circle the correct group that shows the parts of a flower.

anther, stem, ovary


anther, stigma, root

petal, anther, stigma

petal, root, ovary

2 The diagram below shows a flower.

a Label the parts of the flower.



b What happens during pollination?

Pollen from the male part called anther is transferred to the female part which is the stigma.

3 Write the correct seed dispersal method for each picture. Choose from the following words.

animal

explosion

water

wind



helicopter seeds

Wind



lady's fingers

Explosion




berries

Animal



lotus seeds

Water

-
- 
- 4 In which of the following scenarios will the seeds germinate?
Tick (✓) the correct answer.

Matt wraps some seeds in dry cotton wool. He keeps the cotton wool on his table for a week.

Erica wraps some seeds in dry cotton wool. She sprinkles some water on the cotton wool once a day. She keeps the cotton wool on her table for a week.

Lee wraps some seeds in moist cotton wool. She keeps the cotton wool in the refrigerator for a week.