



The National
Orthodox School
Shmaisani

Name:

Worksheet(3) Area

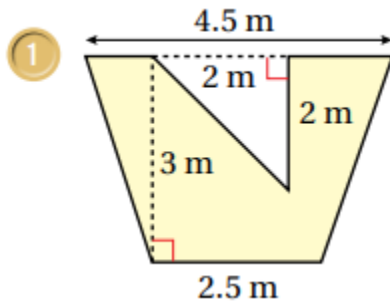
Grade:6(A)

Subject : Math

Date :

Objective: Find the area of composite shapes.

Exercise: Calculate the area of each of the following composite shapes :



Accredited by



Cambridge Assessment
International Education
Cambridge International School

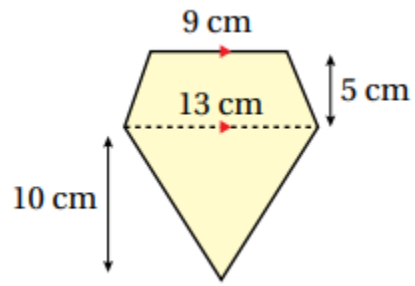
edexcel

CIS
COUNCIL OF
INTERNATIONAL
SCHOOLS

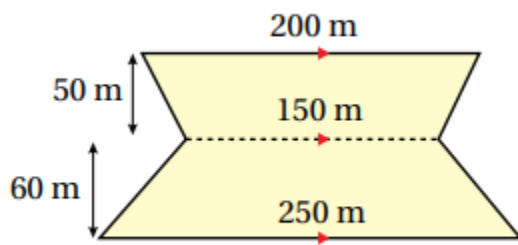


معتمدة من

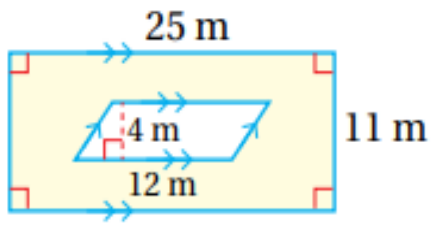
2



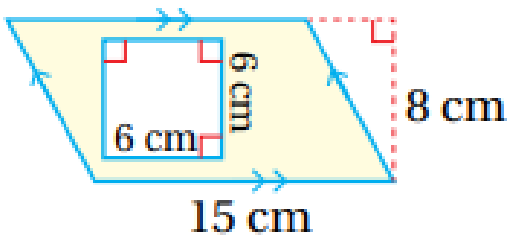
3



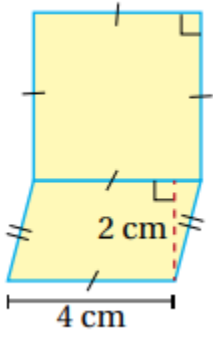
4



5



6



7

