

## The Primary Stage of Grades (4-5) School Year 2022 - 2023

Name: \_\_\_\_\_

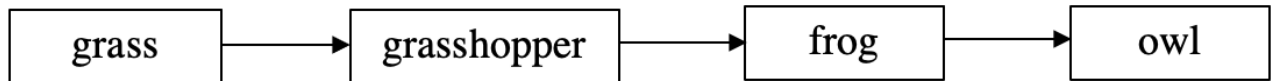
**Unit (4): Food Chains and Food Webs  
Worksheet (2)  
Grade 5 CP (All sections)**

Date: / /

**Objective:**

- Interpret food webs.
- Identify different food chains in different food webs.

**Q1.** Look at this food chain.



a) Draw lines to match the living things to the correct groups.

**living thing**

**group**

frog

primary consumer

grass

producer

grasshopper

secondary consumer

owl

tertiary consumer

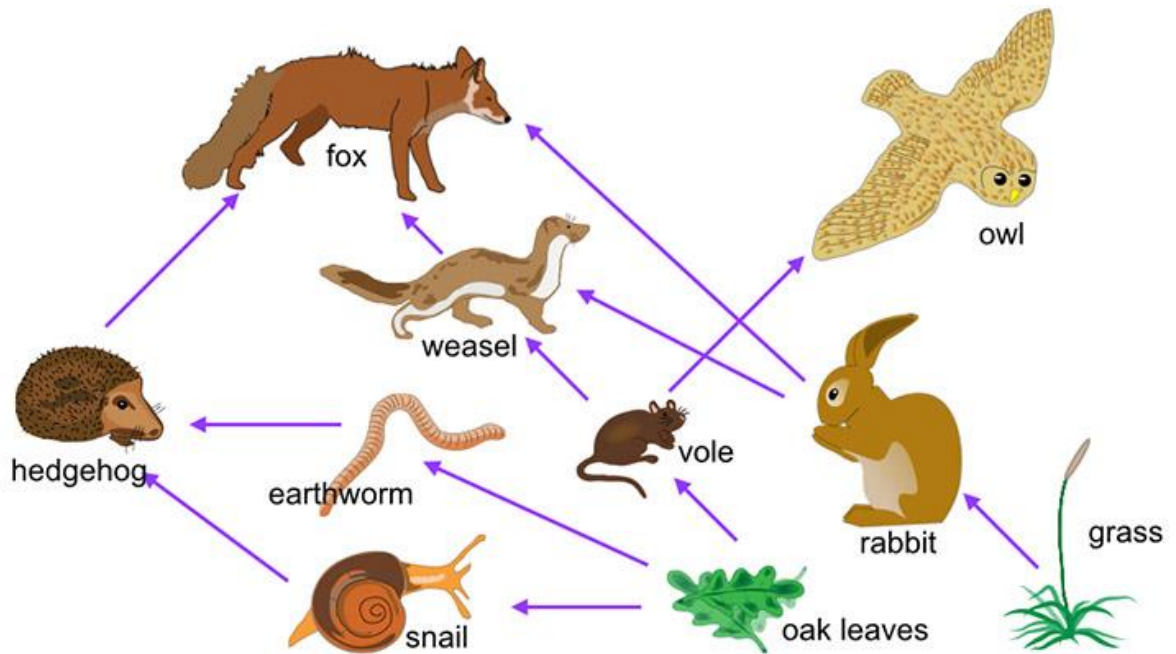
b) The animals in a food chain are consumers. Why?

---



---

Q 2: Study the following food web and answer the following questions



a) Name the producers in this food web?

.....

b) How many consumers are there in this food web?.....

c) Name the prey of the hedgehog? .....

d) Which of these animals is a prey and predator at the same time?

.....

e) What is the main source of energy in any food chain? .....

f) Name the predator of the Weasel. ....

g) Name the primary consumers in this food web.

.....

h) Name the secondary consumers in this food web.

.....

i) Name the top predators in this food web.

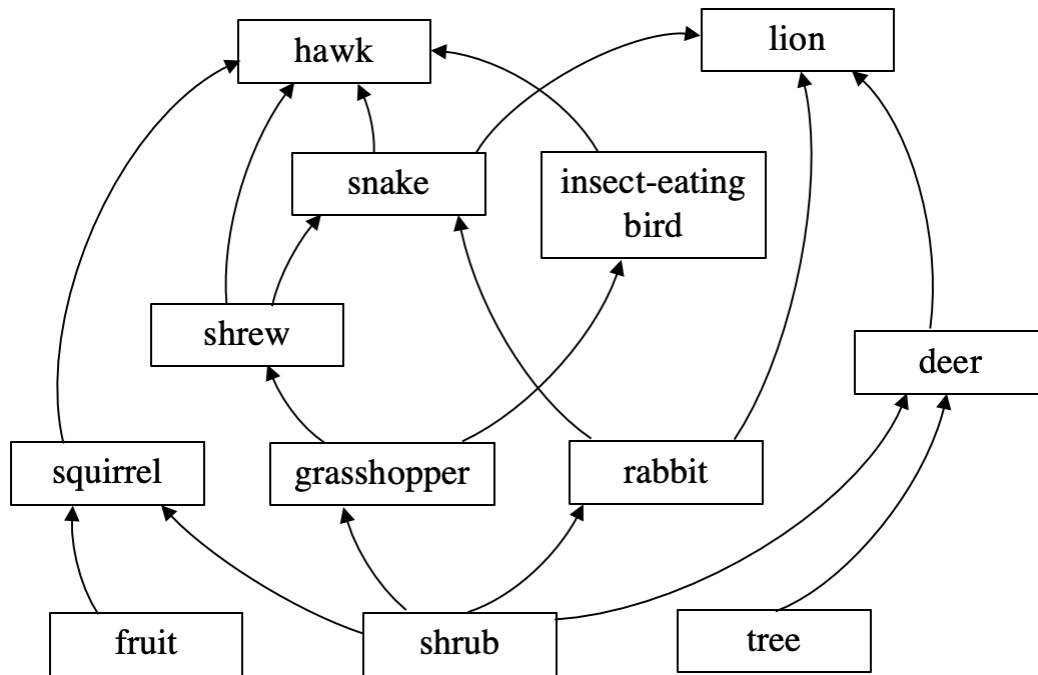
.....

j) What do the arrows represent in this food web?

.....

k) Construct **three** food chains from this food web.

Q 2: A living thing may belong to more than one food chain. Several food chains can be linked together to form a food web. A food web in a habitat is shown below.



(a) What is the main source of food for the shrew?

---

(b) What would happen to shrews if the food source in (a) was removed from the habitat?

---



---

(c) Which **two** animals eat the rabbit?

---

(d) Write down **one** food chain for the grasshopper.

---

(e) Write down **one** food chain for the lion.

---