



Subject: Biology

Worksheet : Excretory system

Name:

Date:

Grade 7 – all sections

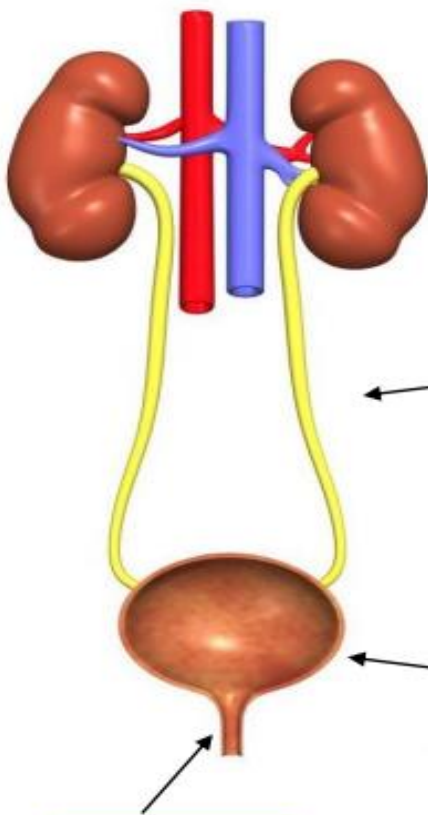
Objective : Be able to answer questions about the urinary system

**Fill in the blanks :**

1. The urinary system ..... Our blood and removes waste products from the body .

**Word bank**

cleans	stores
tubes	leaves
kidneys	skin
urine	sweat



**Kidneys** ⇒ filter the blood separating the waste products from it and producing .....

**Ureters** ⇒ are thin ..... that connect the kidneys to the bladder.

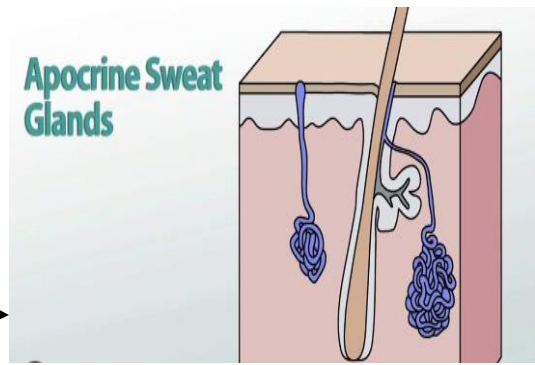
(Urine passes from the ..... to the bladder through the ureters.)

**Bladder** ⇒ ..... the urine until it is full.

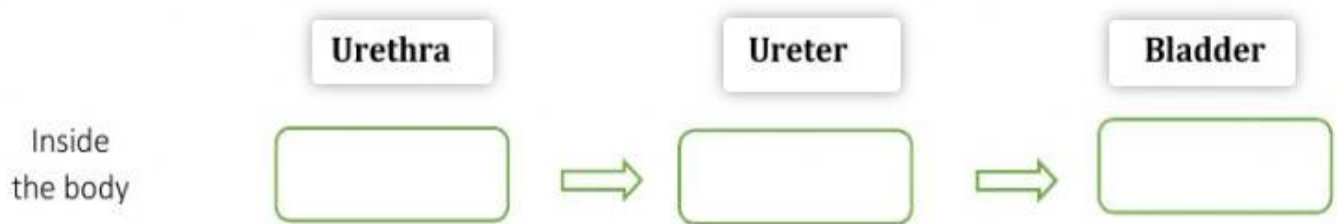
**Urethra** ⇒ Urine ..... the body through the urethra.



We also eliminate waste products through the **pores of our** ..... when we .....



2. Put the following three parts of the urinary system in order as the urine passes through them on its way to the outside of the body .



3. Complete the table below by identifying the part of the urinary system that is responsible for each listed function .

- Urethra                      ureter                      bladder                      Kidneys

Function	Part
Urine leaves each kidney through this part	
Urine leaves the body through this part	
Filters the wastes out of the blood	
A muscular sac that holds urine until the urine is excreted	

4. Using the following list of terms, copy and complete the following paragraph. You may use words more than once:

*urine*

*blood*

*filter*

*kidneys*

*death*

*urea*

..... is very toxic. If the concentration in your ..... gets too high, it damages other organs including your brain. It can make you very ill and may lead to ..... It is removed from your body by special organs called the .....

They ..... the toxic molecules from your ..... and pass it out of your body as part of your .....

Accredited by



Cambridge Assessment  
International Education  
Cambridge International School

edexcel

CIS  
COUNCIL OF  
INTERNATIONAL  
SCHOOLS



معتمدة من