

The Primary Stage of Grades (4-5) School Year 2022 - 2023

Name: _____

Subject: Science
Worksheet #1: Magnetism

Date: / /


Class: Grade Five National (All Sections)

Objective/s:

- Classify materials into magnetic and non-magnetic.

Question one:

Look at the picture below and circle the materials that are magnetic.



Iron screwdriver



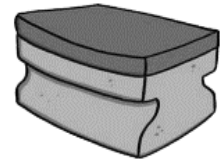
Cobalt wrench



stainless steel utensils



glass



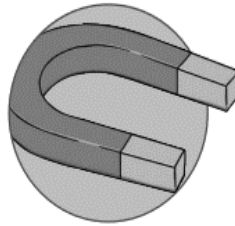
sponge



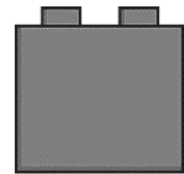
Iron nail



Nickle needle



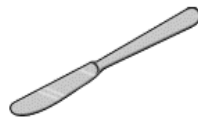
brick



plastic brick



Steel paper clip




Steel knife



shells



teddy bear



wood

Question two:

Complete the sentences using the word bank below.

Word bank						
repel	north	attract	south	pull	push	poles

- Magnets have two....., One is called the pole and the other is thepole.
- When opposite poles are near one another, they together. This means the two poles
- When two of the same poles are near one another, they away from one another. This means the two poles each other

Question three:

Draw the magnetic field lines in each of the following cases:

