

The Primary Stage of Grades (4-5)
School Year 2022 - 2023

Name: _____

Subject: Mathematics

Date: / / 2022

Worksheet (2)

Class: 5CP (C,D,E,F&G)

Find the **product** of the following.

a)				
			7	2
	X		5	7
<hr style="border: 1px solid black;"/>				
+				
<hr style="border: 1px solid black;"/>				

b)				
			3	6
	X		9	4
<hr style="border: 1px solid black;"/>				
+				
<hr style="border: 1px solid black;"/>				


c)			
		9	6
	X	2	9
<hr style="border: 1px solid black;"/>			
+			
<hr style="border: 1px solid black;"/>			

d)			
		9	3
	X	8	6
<hr style="border: 1px solid black;"/>			
+			
<hr style="border: 1px solid black;"/>			

e) $2.8 \times 3.7 =$




f) $3.98 \times 2.6 =$




g) $6.7 \times 2.95 =$



h) $5.89 \times 7.3 =$




i) $23 \times 6.9 =$




j) $8.9 \times 8.7 =$



k) $94 \times 37 =$



l) $7.3 \times 6.47 =$




m) $67 \times 9.8 =$



n) $8.26 \times 3.4 =$



o) $96 \times 28 =$



p) $0.54 \times 5.9 =$

