

**The Primary Stage of Grades (4-5)
School Year 2022- 2023**

Name: _____

Subject: Science

Unit 8: Movement of light

Worksheet 2: Practice

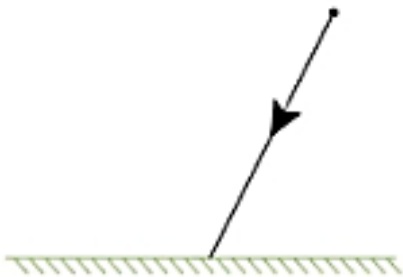
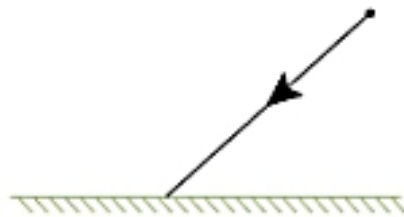
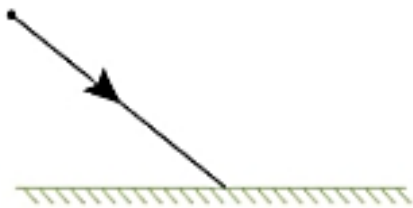
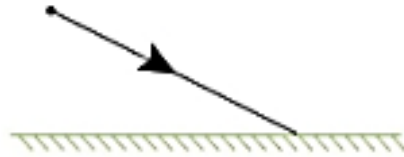

Date: / /

Class: Grade 5 CP (All sections)

Objective/s:

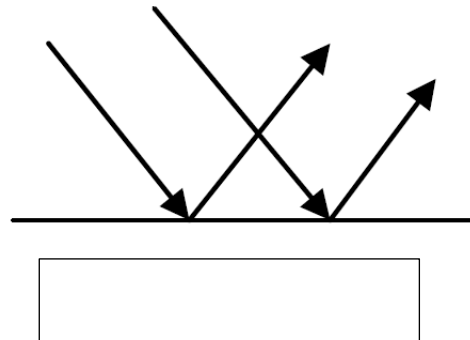
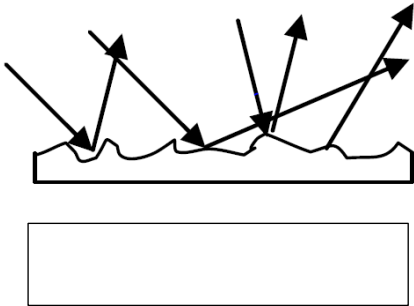
- Draw the incident and reflected rays according to the law of reflection.

Question1: The diagrams show a ray of light hitting a mirror. Draw the normal line followed by the reflected ray. Make sure that you use a ruler.



Question 2:

a) Which diagram shows a regular reflection? And which diagram shows a diffuse reflection?



b) label the diagram with the following:

Incident ray Reflected ray Normal Mirror

