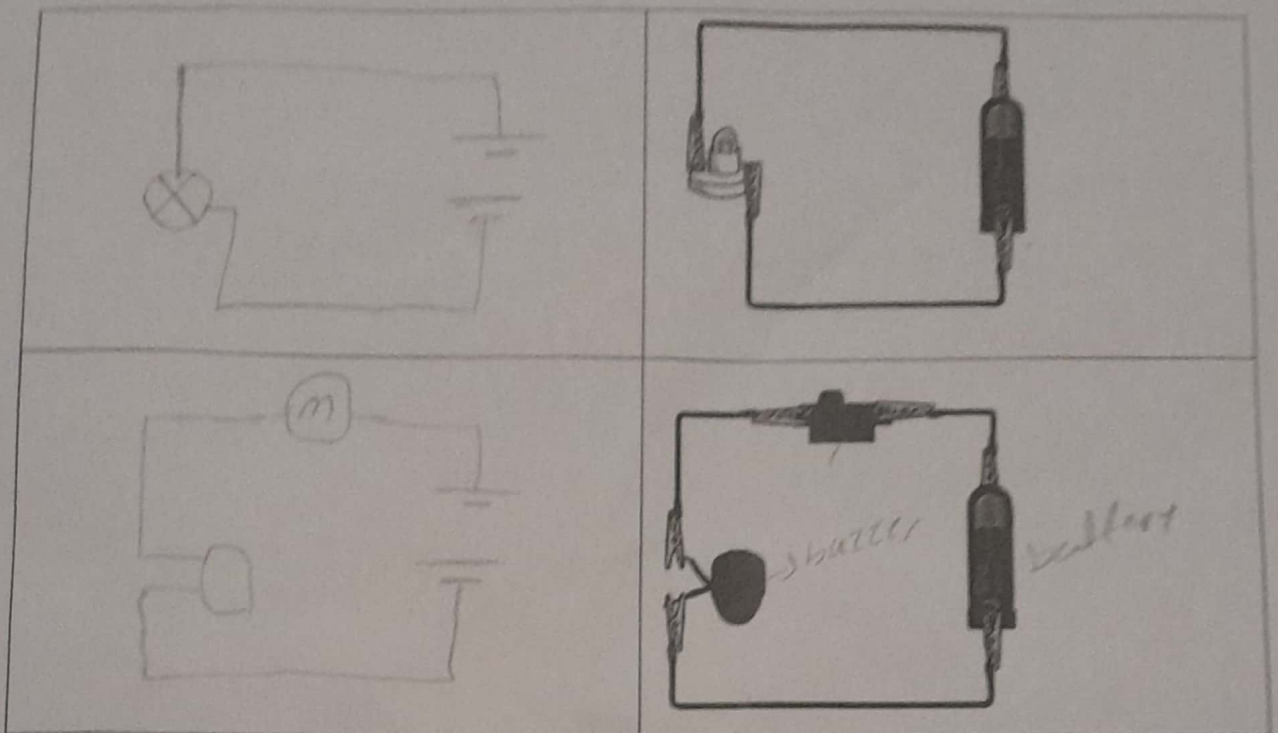
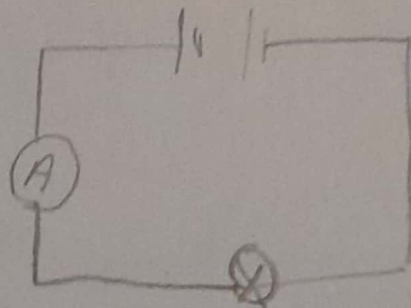


Draw the following circuits using the scientific circuit symbol:

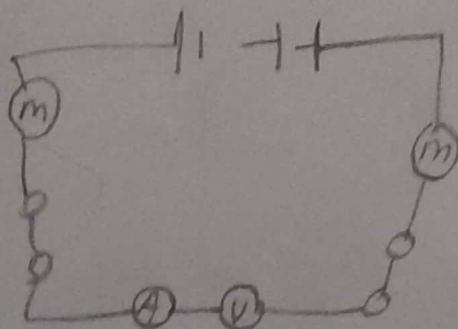


Draw the following circuits using the scientific circuit symbols:

A) Circuits should contain: a bulb, a cell, an ammeter



B) Circuit should contain: a three celled battery, two motors each working separately with a way to turn each one on/off in addition to ammeters and voltmeters



Worksheet |

Lower Secondary
Stage (6-8)

1st Semester | 2023-2024

Name: Yasmina Alam
Subject: Physics

Topic: Interpreting and drawing circuits

Objectives:

Marks: _____/15

- To be able to interpret and draw circuits

Look at the circuits below and label each part:

