

5/10/2022

# Let's Review

1 In which group does each object belong?  
Tick (✓) the correct boxes.


	Living things	Things that were once alive	Things that have never lived
cooked prawn			
pet fish			
orange tree			
plastic chair			

2 Which object does not belong in each group? Circle it.



a Living things



b Things that have never lived



c Things that were once alive





5/10/2022

3 Look at the table.






The table headings are missing. Write the correct headings to complete the table.

Use the words below.

~~living~~      ~~never lived~~      ~~once alive~~

 metal spoon	✓		
 tomato plant			✓

5/11/2022

 glass jar	✓		
 sand	✓		
 leaf		✓	
 bee			✓
 shell		✓	

- 4 Write the names of the life processes being described.

Description	Life process
Living things can have young.	
Living things take in and use food.	
Living things become bigger.	
Living things can go from one place to another.	

- 5 This is Bot the Robot.

Bot works in a factory. A factory is a place where objects are made. Bot makes more robots.



Is Bot a living thing? Why?  
Circle **two** correct statements.

Yes. Bot can move.

Yes. Bot can make more robots.

✓ No. Bot does not grow bigger.

✓ No. Bot does not need food.